



6th March

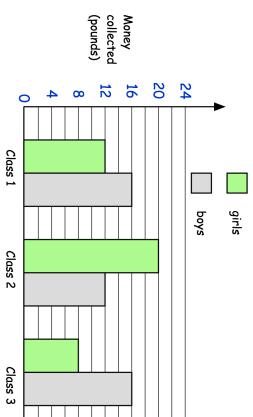
$$\square \div 100 = 60$$

$$8.9 + 2.9$$

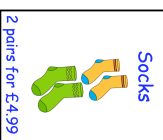
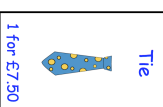
Three classes at a primary school collected some money for charity.

In class 2, how much more money did the girls collect than the boys?

The chart shows how much money the boys and girls collected.



How many classes collect more than £30?



Nicole buys a tie and 2 pairs of socks. She pays with a £20 note.
How much change does she get?



6th March

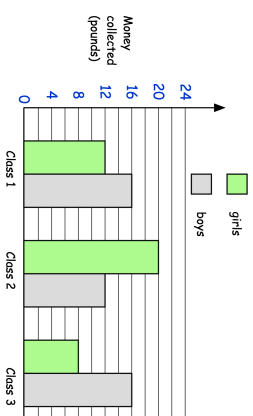
$$\square \div 100 = 60$$

$$8.9 + 2.9$$

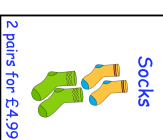
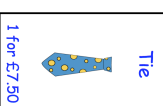
Three classes at a primary school collected some money for charity.

In class 2, how much more money did the girls collect than the boys?

The chart shows how much money the boys and girls collected.



How many classes collect more than £30?



Nicole buys a tie and 2 pairs of socks. She pays with a £20 note.
How much change does she get?