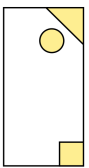


8th March



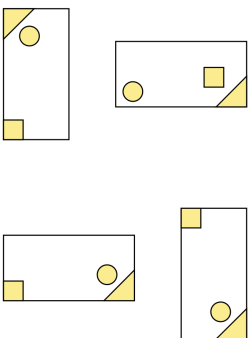
$$2\frac{2}{7} + \frac{2}{7} + \frac{2}{7}$$

Orla has a rectangular tile with this design on it



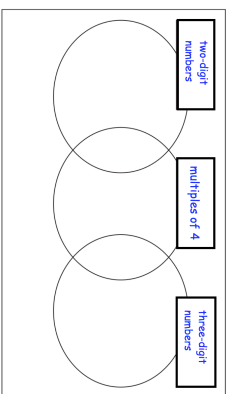
$$135 \times 5$$

Circle the tiles that have the same design as Orla's tile



Write each number in its correct place on the diagram

9 20 45 200

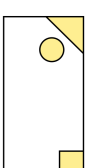


8th March



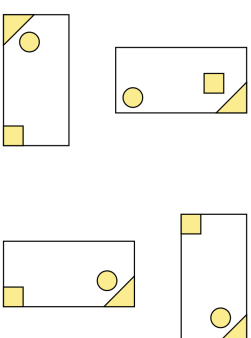
$$2\frac{2}{7} + \frac{2}{7} + \frac{2}{7}$$

Orla has a rectangular tile with this design on it



$$135 \times 5$$

Circle the tiles that have the same design as Orla's tile



Write each number in its correct place on the diagram

9 20 45 200

