

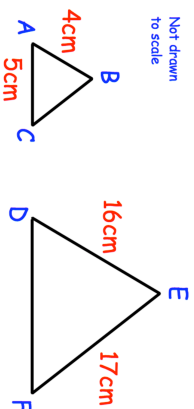
21st April

$$7,912 \times 38$$

$$\begin{array}{r} 90 \\ \times 5580 \\ \hline \end{array}$$

Here are two similar triangles.

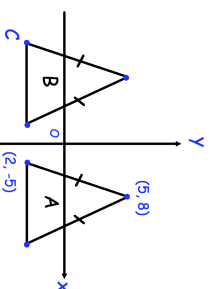
Work out the length of DF



Find the HCF (highest common factor) of 28 and 42

Triangle B is a reflection of triangle A in the y-axis.
Both triangles are isosceles triangles.

What are coordinates of point C?



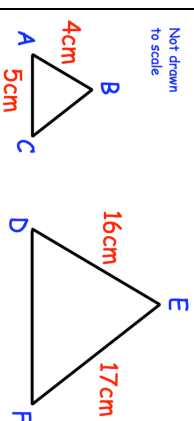
21st April

$$7,912 \times 38$$

$$\begin{array}{r} 90 \\ \times 5580 \\ \hline \end{array}$$

Here are two similar triangles.

Work out the length of DF



Find the HCF (highest common factor) of 28 and 42

Triangle B is a reflection of triangle A in the y-axis.
Both triangles are isosceles triangles.

What are coordinates of point C?

