

Name: _____

Primary 5-a-day

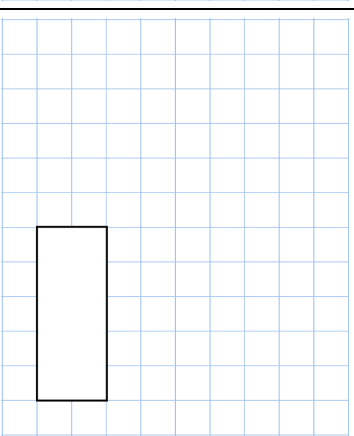
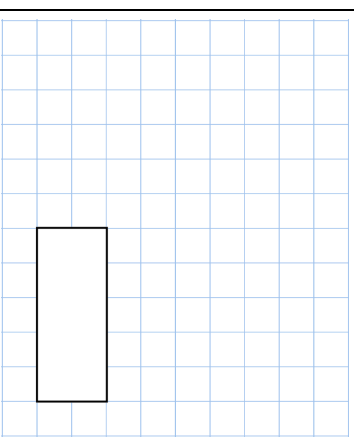
Platinum



25th April

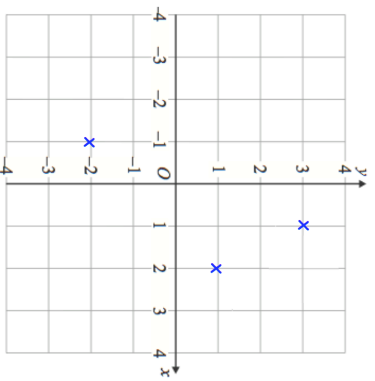
$$7\frac{1}{8} - \frac{1}{3}$$

13% of 800



The coordinates plotted on the grid are three vertices of a parallelogram

Write down the coordinates of the fourth vertex of the parallelogram.



How many lines of symmetry does the parallelogram have?

The ratio of boys to girls in a school is 3:5.

There are 44 more girls than boys at the school.

How many children go to the school?

Name: _____

Primary 5-a-day

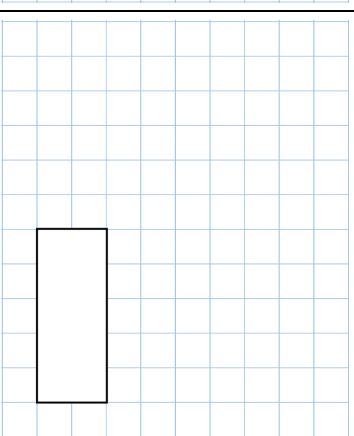
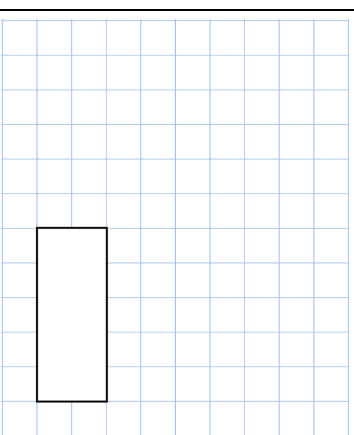
Platinum



25th April

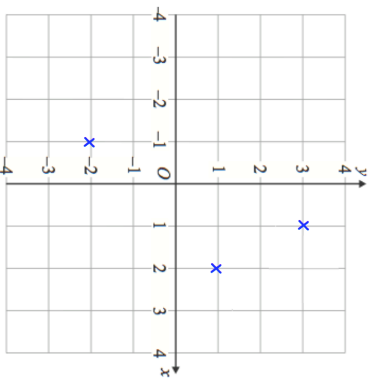
$$7\frac{1}{8} - \frac{1}{3}$$

13% of 800



The coordinates plotted on the grid are three vertices of a parallelogram

Write down the coordinates of the fourth vertex of the parallelogram.



How many lines of symmetry does the parallelogram have?

The ratio of boys to girls in a school is 3:5.

There are 44 more girls than boys at the school.

How many children go to the school?