

Name: _____

Primary 5-a-day

Platinum



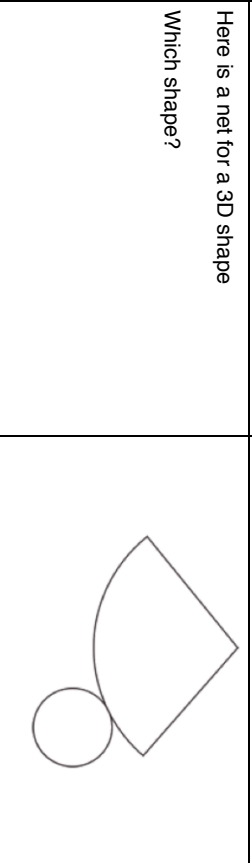
21st August

45% of 800

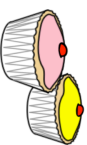
$26 \div 5$

Here is a net for a 3D shape

Which shape?



Burt is making cupcakes
He has made 700 cupcakes.
Burt places the cupcakes in boxes of 16.
How many boxes can he fill?



There are 48 students in a year group.
The pie chart shows information about
their eye colour.

How many students have brown eyes?



Name: _____

Primary 5-a-day

Platinum



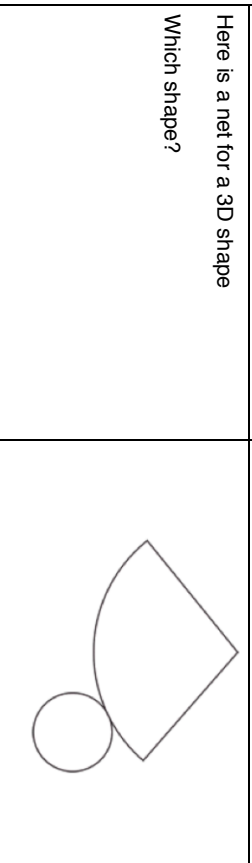
21st August

45% of 800

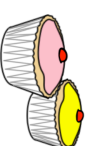
$26 \div 5$

Here is a net for a 3D shape

Which shape?



Burt is making cupcakes
He has made 700 cupcakes.
Burt places the cupcakes in boxes of 16.
How many boxes can he fill?



There are 48 students in a year group.
The pie chart shows information about
their eye colour.

How many students have brown eyes?

