

Name: \_\_\_\_\_

Primary 5-a-day

Platinum



28th August

$1.74 \div 12$

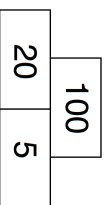
Grid for calculation

Circle all the prime numbers

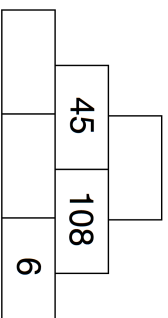
- |     |     |    |
|-----|-----|----|
| 7   | 19  | 2  |
| 17  | 81  |    |
| 9   | 1   | 27 |
|     |     | 99 |
| 101 | 100 | 55 |

Grid for calculation

In this multiplication pyramid, two numbers are multiplied to give the number above.



Find the missing numbers



Here are three equations

$$\begin{aligned} X + Y + Z &= 37 \\ X + Y &= 27 \\ Y + Z &= 23 \end{aligned}$$

What are the values of x, y and z?

$$\begin{aligned} X &= \square \\ Y &= \square \\ Z &= \square \end{aligned}$$

Name: \_\_\_\_\_

Primary 5-a-day

Platinum



28th August

$1.74 \div 12$

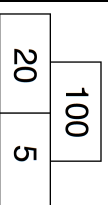
Grid for calculation

Circle all the prime numbers

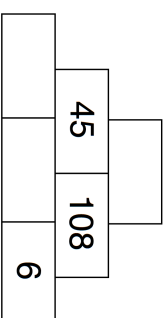
- |     |     |    |
|-----|-----|----|
| 7   | 19  | 2  |
| 17  | 81  |    |
| 9   | 1   | 27 |
|     |     | 99 |
| 101 | 100 | 55 |

Grid for calculation

In this multiplication pyramid, two numbers are multiplied to give the number above.



Find the missing numbers



Here are three equations

$$\begin{aligned} X + Y + Z &= 37 \\ X + Y &= 27 \\ Y + Z &= 23 \end{aligned}$$

What are the values of x, y and z?

$$\begin{aligned} X &= \square \\ Y &= \square \\ Z &= \square \end{aligned}$$