




8th August

$9.03 \div 7$

$68\% = \frac{\square}{\square}$

--	--

--	--

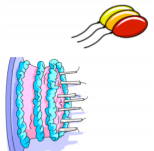


Write down the ratio of red squares to green circles

Rebecca is  $\frac{1}{6}$  of Samuel's age.

Samuel is 7 years younger than Louise.

If Rebecca is 9 years old, how old is Louise?



Work out the missing number

$\square \div \frac{7}{15} = \frac{2}{3}$




8th August

$9.03 \div 7$

$68\% = \frac{\square}{\square}$

--	--

--	--

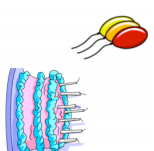


Write down the ratio of red squares to green circles

Rebecca is  $\frac{1}{6}$  of Samuel's age.

Samuel is 7 years younger than Louise.

If Rebecca is 9 years old, how old is Louise?



Work out the missing number

$\square \div \frac{7}{15} = \frac{2}{3}$