

Name: \_\_\_\_\_

Primary 5-a-day

Platinum



19th December

30% of 540

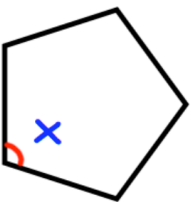
$10^4$

Grid area for calculation of 30% of 540. Below the grid is a rectangular box for the answer.

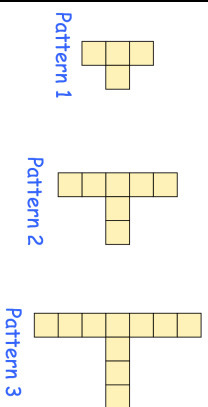
Grid area for calculation of  $10^4$ . Below the grid is a rectangular box for the answer.

Here is a regular pentagon

Find the size of angle x



Here is a sequence of patterns



How many squares are in Pattern 4?

How many squares are in Pattern 6?

Name: \_\_\_\_\_

Primary 5-a-day

Platinum



19th December

30% of 540

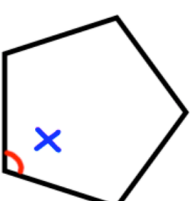
$10^4$

Grid area for calculation of 30% of 540. Below the grid is a rectangular box for the answer.

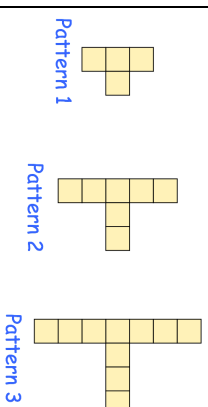
Grid area for calculation of  $10^4$ . Below the grid is a rectangular box for the answer.

Here is a regular pentagon

Find the size of angle x



Here is a sequence of patterns



How many squares are in Pattern 4?

How many squares are in Pattern 6?