



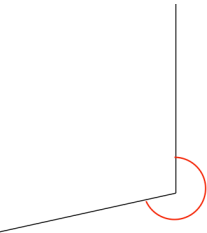
Name: \_\_\_\_\_

Primary 5-a-day

Platinum



21st December

$\begin{array}{r} 17 \\ \underline{697} \\ 17697 \end{array}$ 	$10.42 - 1.86755$ 
Abigail has 2p, 5p and 10p coins. For every four 2p coins, Abigail has three 5p coins. For every one 5p coins, Abigail has two 10p coins.	Abigail has twenty 2p coins. How much money does Abigail have?
Circle the largest fraction $\frac{3}{5}$ $\frac{5}{8}$ $\frac{2}{3}$ $\frac{7}{20}$ $\frac{5}{9}$	
Measure this angle 	



Name: \_\_\_\_\_

Primary 5-a-day

Platinum



21st December

$\begin{array}{r} 17 \\ \underline{697} \\ 17697 \end{array}$ 	$10.42 - 1.86755$ 
Abigail has 2p, 5p and 10p coins. For every four 2p coins, Abigail has three 5p coins. For every one 5p coins, Abigail has two 10p coins.	Abigail has twenty 2p coins. How much money does Abigail have?
Circle the largest fraction $\frac{3}{5}$ $\frac{5}{8}$ $\frac{2}{3}$ $\frac{7}{20}$ $\frac{5}{9}$	
Measure this angle 