

Name: \_\_\_\_\_

Primary 5-a-day

Platinum



29th December

$$\frac{7}{8} - \frac{2}{3}$$

<input type="text"/>

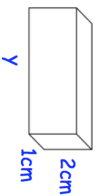
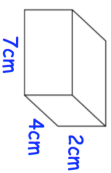
$$0.07 \times 20$$

<input type="text"/>

Work out the LCM of 16 and 20

Both cuboids have the same volume.

Find  $y$



On Monday Dara read  $\frac{3}{5}$  of his book.

On Tuesday he read the **other** 180 pages to finish his book.

How many pages are there in Dara's book?

Name: \_\_\_\_\_

Primary 5-a-day

Platinum



29th December

$$\frac{7}{8} - \frac{2}{3}$$

<input type="text"/>

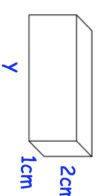
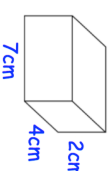
$$0.07 \times 20$$

<input type="text"/>

Work out the LCM of 16 and 20

Both cuboids have the same volume.

Find  $y$



On Monday Dara read  $\frac{3}{5}$  of his book.

On Tuesday he read the **other** 180 pages to finish his book.

How many pages are there in Dara's book?