

Name: _____

Primary 5-a-day

Platinum

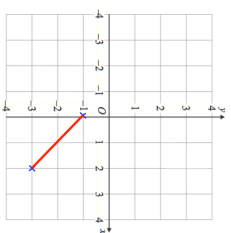


1st July

$$19^2 = 1,000 - \square$$

$$750 - 822$$

On the grid is one side of a quadrilateral with 3 acute angles.



Complete the quadrilateral

Georgia and Emma share 40 sweets in the ratio 3:5.


How many sweets does Emma get?



In Year 7, 90% of children like apples.

80% of the children who like apples also like oranges.

In Year 7, what percentage of children like **both** apples and oranges?



Name: _____

Primary 5-a-day

Platinum

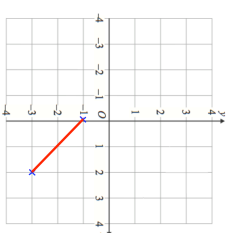


1st July

$$19^2 = 1,000 - \square$$

$$750 - 822$$

On the grid is one side of a quadrilateral with 3 acute angles.



Complete the quadrilateral

Georgia and Emma share 40 sweets in the ratio 3:5.

How many sweets does Emma get?



In Year 7, 90% of children like apples.

80% of the children who like apples also like oranges.

In Year 7, what percentage of children like **both** apples and oranges?

