

Name: _____

Primary 5-a-day

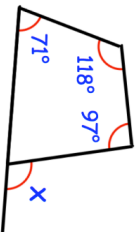
Platinum

12th July

$$99 \times 50 = \square \times 6$$

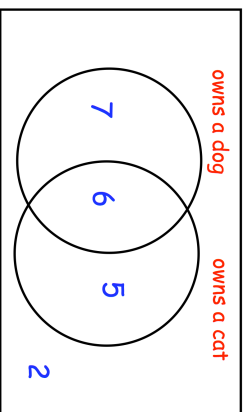
$$8.216 \div 8$$

Find the size of angle x



The Venn diagram shows information about the pets owned in a class.

How many children own a cat?



What percentage of children own a dog?

Name: _____

Primary 5-a-day

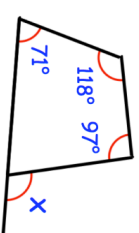
Platinum

12th July

$$99 \times 50 = \square \times 6$$

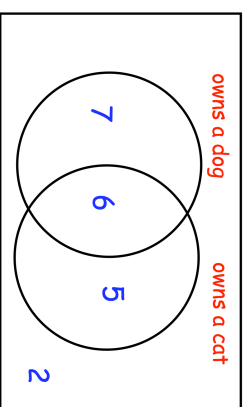
$$8.216 \div 8$$

Find the size of angle x



The Venn diagram shows information about the pets owned in a class.

How many children own a cat?



What percentage of children own a dog?