



17th July

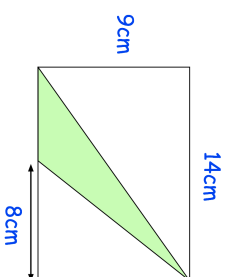
$$100 - 5^2$$

$$0.375 = \frac{\square}{\square}$$

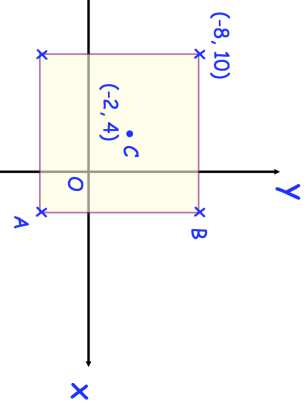
--	--

--	--

Find the shaded area



Shown is a square.
C is the centre of the square.



Find the coordinates of B



17th July

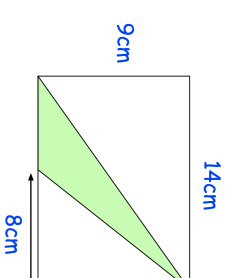
$$100 - 5^2$$

$$0.375 = \frac{\square}{\square}$$

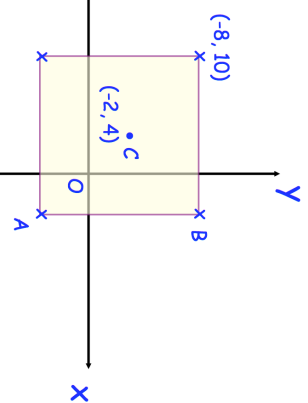
--	--

--	--

Find the shaded area



Shown is a square.
C is the centre of the square.



Find the coordinates of B