

Name: _____

Primary 5-a-day

Platinum

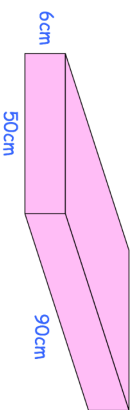


22nd July

$$\begin{array}{r} 354 \\ \times 126 \\ \hline \end{array}$$

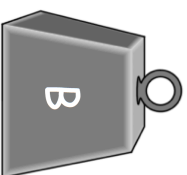
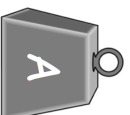
$$\frac{\square}{0.1} = 20$$

Work out the volume of the cuboid



Convert 2.5 kilometres into millimetres

B is 5 times heavier than A
B is 18kg heavier than A
How heavy is B?



Name: _____

Primary 5-a-day

Platinum

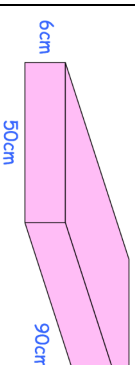


22nd July

$$\begin{array}{r} 354 \\ \times 126 \\ \hline \end{array}$$

$$\frac{\square}{0.1} = 20$$

Work out the volume of the cuboid



Convert 2.5 kilometres into millimetres

B is 5 times heavier than A
B is 18kg heavier than A
How heavy is B?

