

Name: _____

Primary 5-a-day


Platinum



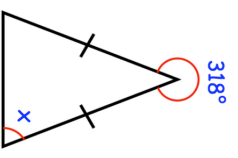
24th July

$$5^3 + 5^2$$

$$3,840 \div 80$$

<p>A car travels at 50 miles per hour for 4 hours. How far does the car travel?</p>	
---	---

<p>Write down the value of the 1 in the answer to $1,470 \times 3,000$</p>	<p>Find the size of the missing angle x</p>
---	---



Name: _____

Primary 5-a-day


Platinum



24th July

$$5^3 + 5^2$$

$$3,840 \div 80$$

<p>A car travels at 50 miles per hour for 4 hours. How far does the car travel?</p>	
---	---

<p>Write down the value of the 1 in the answer to $1,470 \times 3,000$</p>	<p>Find the size of the missing angle x</p>
---	---

