

Name: _____

Primary 5-a-day

Platinum



27th July

$$-9 + 205$$

$$712 \times 49$$

<input type="text"/>

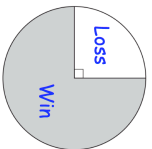
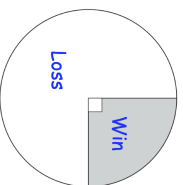
<input type="text"/>

Hannah and Rory play tennis for their school.

Explain how James might be correct

The pie charts show information about their results

James says that Hannah has won more matches than Rory.

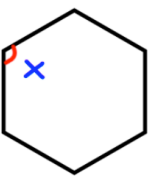


Hannah

Rory

Shown is a regular hexagon

Find the size of angle x



Name: _____

Primary 5-a-day

Platinum



27th July

$$-9 + 205$$

$$712 \times 49$$

<input type="text"/>

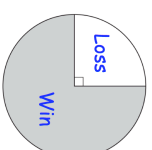
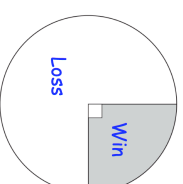
<input type="text"/>

Hannah and Rory play tennis for their school.

Explain how James might be correct

The pie charts show information about their results

James says that Hannah has won more matches than Rory.



Hannah

Rory

Shown is a regular hexagon

Find the size of angle x

