

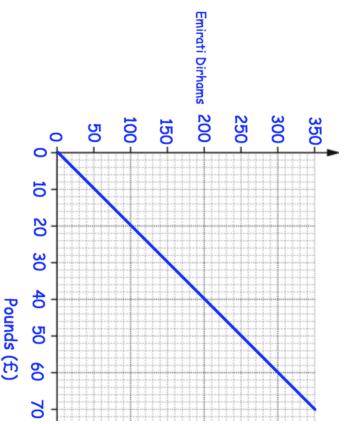


8th July

$$\frac{3}{10} = 0.3$$

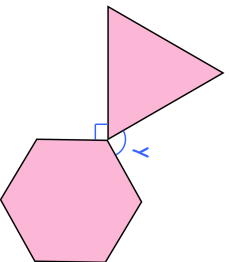
--	--

This graph can be used to convert between Pounds and Dirhams



Shown is an equilateral triangle and a regular hexagon.

Find y .



5% of 9,000

--	--

Convert £50 into Dirhams

Convert 175 Dirhams into Pounds

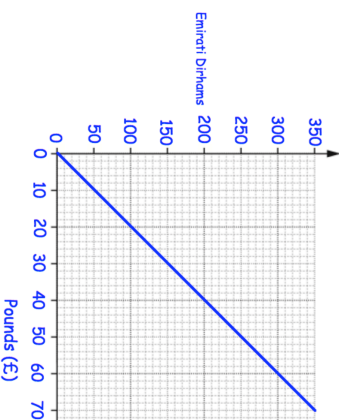


8th July

$$\frac{3}{10} = 0.3$$

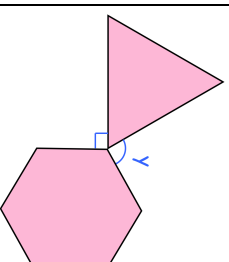
--	--

This graph can be used to convert between Pounds and Dirhams



Shown is an equilateral triangle and a regular hexagon.

Find y .



5% of 9,000

--	--

Convert £50 into Dirhams

Convert 175 Dirhams into Pounds