

Name: _____

Primary 5-a-day

Platinum



3rd June

$$3\frac{1}{5} \times 30$$

<input type="text"/>

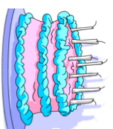
$$4.5 \div 90$$

<input type="text"/>

A cake weighs 850g.

40% of the cake is sugar.

Work out how many grams of sugar are in the cake.



m is a whole number.

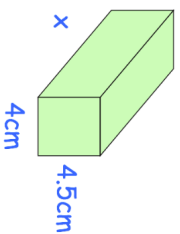
6m is greater than 40

10m is less than 120

Write all the numbers that m could be

Find the length of this cuboid

Volume: 432cm^3



Name: _____

Primary 5-a-day

Platinum



3rd June

$$3\frac{1}{5} \times 30$$

<input type="text"/>

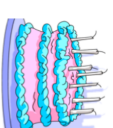
$$4.5 \div 90$$

<input type="text"/>

A cake weighs 850g.

40% of the cake is sugar.

Work out how many grams of sugar are in the cake.



m is a whole number.

6m is greater than 40

10m is less than 120

Write all the numbers that m could be

Find the length of this cuboid

Volume: 432cm^3

