

Name: _____

Primary 5-a-day

Platinum



12th May

$$0.09 \times 28$$

<input type="text"/>

$$\begin{array}{r} 33 \\ \underline{2904} \\ 332904 \end{array}$$

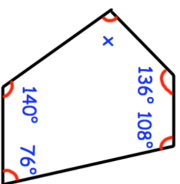
<input type="text"/>

A theatre has 52 rows of seats.
Each row has 19 seats.

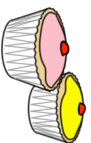
Tickets cost £13 each.
All tickets are sold for a show.

Estimate how much money is raised.

Find x



Burt is making cupcakes
He has made 20,000 cupcakes.
Burt places the cupcakes in boxes of 16.
How many boxes can he fill?



Name: _____

Primary 5-a-day

Platinum



12th May

$$0.09 \times 28$$

<input type="text"/>

$$\begin{array}{r} 33 \\ \underline{2904} \\ 332904 \end{array}$$

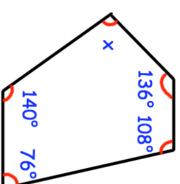
<input type="text"/>

A theatre has 52 rows of seats.
Each row has 19 seats.

Tickets cost £13 each.
All tickets are sold for a show.

Estimate how much money is raised.

Find x



Burt is making cupcakes
He has made 20,000 cupcakes.
Burt places the cupcakes in boxes of 16.
How many boxes can he fill?

