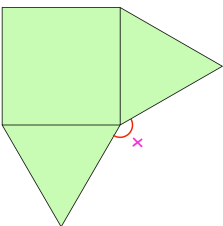
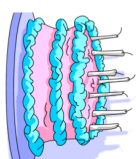
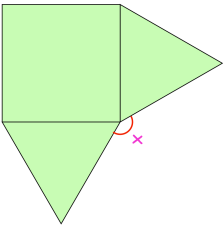




28th May	
$1\frac{1}{2} \times 11$	$15\% \text{ of } 60$
<p>Here is a square and two equilateral triangles.</p> <p>Find x</p>	
<p>A window cleaner charges</p> <p>£3 call out charge plus £0.75 per window</p> <p>The window cleaner charges Mr. Jones £7.50</p>	<p>How many windows did the window cleaner clean?</p>
<p>Lily gives $\frac{6}{7}$ of a cake to Leo.</p> <p>Leo shares this piece of cake equally between Phoebe, Ruby and himself.</p> <p>What fraction of the whole cake does Ruby receive?</p>	



28th May	
$1\frac{1}{2} \times 11$	$15\% \text{ of } 60$
<p>Here is a square and two equilateral triangles.</p> <p>Find x</p>	
<p>A window cleaner charges</p> <p>£3 call out charge plus £0.75 per window</p> <p>The window cleaner charges Mr. Jones £7.50</p>	<p>How many windows did the window cleaner clean?</p>
<p>Lily gives $\frac{6}{7}$ of a cake to Leo.</p> <p>Leo shares this piece of cake equally between Phoebe, Ruby and himself.</p> <p>What fraction of the whole cake does Ruby receive?</p>	