

Name: _____

Primary 5-a-day

Platinum



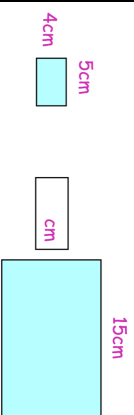
23rd November

$$0.85 \times 20$$

$$\frac{23}{30} - \frac{1}{4}$$

Here are two similar rectangles.

Work out the missing length.



In a season, Torquay United

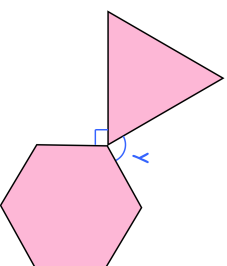
Win 55% of their matches

Draw $\frac{1}{3}$ of their matches

What fraction of their matches did Torquay United lose?

Shown is an equilateral triangle and a regular hexagon.

Find y .



Name: _____

Primary 5-a-day

Platinum



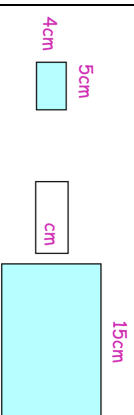
23rd November

$$0.85 \times 20$$

$$\frac{23}{30} - \frac{1}{4}$$

Here are two similar rectangles.

Work out the missing length.



In a season, Torquay United

Win 55% of their matches

Draw $\frac{1}{3}$ of their matches

What fraction of their matches did Torquay United lose?

Shown is an equilateral triangle and a regular hexagon.

Find y .

