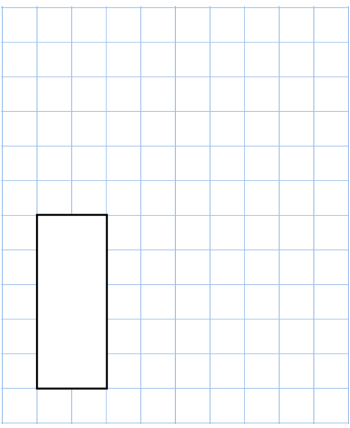
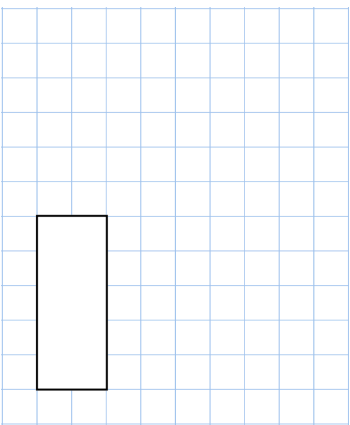


Name: _____

Primary 5-a-day

Platinum



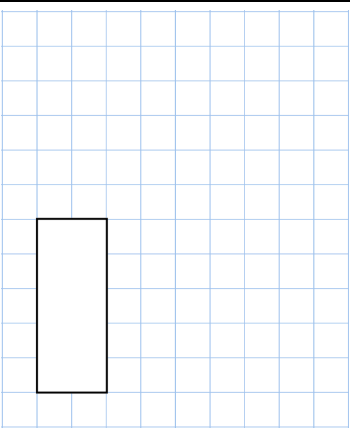
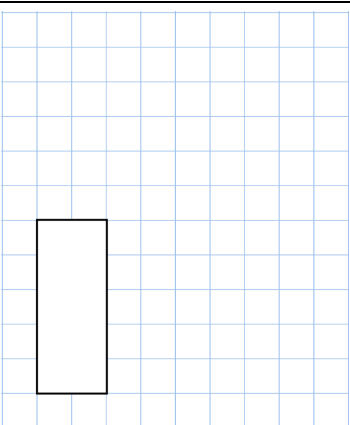
28th November	
35% of 620	$\frac{4}{15} \div 4$
	
What percentage of 20 is 17?	
There are 40 beads in a bag. Each bead is either red or yellow. 12 beads are yellow.	Write down the ratio of red beads to yellow beads
The mean of the numbers on these four number cards is 4.	Find the missing number.
<input type="text" value="6"/> <input type="text" value="7"/> <input type="text" value="3"/> <input type="text"/>	

Name: _____

Primary 5-a-day

Platinum



28th November	
35% of 620	$\frac{4}{15} \div 4$
	
What percentage of 20 is 17?	
There are 40 beads in a bag. Each bead is either red or yellow. 12 beads are yellow.	Write down the ratio of red beads to yellow beads
The mean of the numbers on these four number cards is 4.	Find the missing number.
<input type="text" value="6"/> <input type="text" value="7"/> <input type="text" value="3"/> <input type="text"/>	