

Name: _____

Primary 5-a-day

Platinum



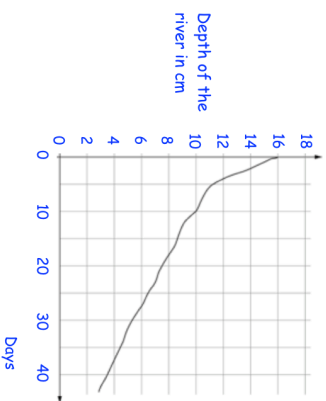
10th October

$$6.2 \times 3,000$$

<input type="text"/>

$$20\% \text{ of } 52$$

<input type="text"/>

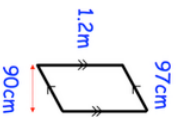


What was the depth of the river after 10 days?

<input type="text"/>

How long did it take the river to go from a depth of 16cm to 11cm?

Work out the area of this parallelogram



<input type="text"/> cm ²

Name: _____

Primary 5-a-day

Platinum



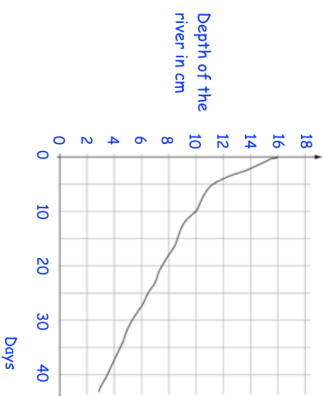
10th October

$$6.2 \times 3,000$$

<input type="text"/>

$$20\% \text{ of } 52$$

<input type="text"/>

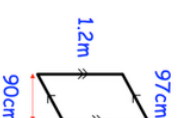


What was the depth of the river after 10 days?

<input type="text"/>

How long did it take the river to go from a depth of 16cm to 11cm?

Work out the area of this parallelogram



<input type="text"/> cm ²
