

15th October

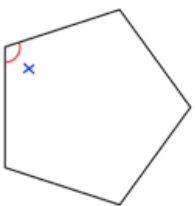
$0.08 \times 500$

$$\begin{array}{r} 185 \\ \times 134 \\ \hline \end{array}$$



Here is a regular pentagon.

Find the size of each angle

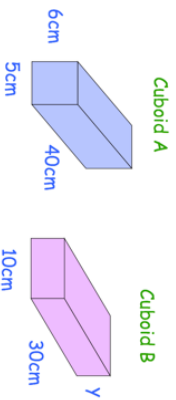


$n = 18$

What is  $20n + 70$ ?

Cuboid A and Cuboid B have the same volume.

Find the height of cuboid B.



15th October

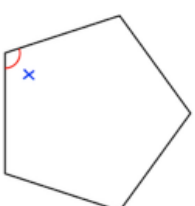
$0.08 \times 500$

$$\begin{array}{r} 185 \\ \times 134 \\ \hline \end{array}$$



Here is a regular pentagon.

Find the size of each angle



$n = 18$

What is  $20n + 70$ ?

Cuboid A and Cuboid B have the same volume.

Find the height of cuboid B.

