

Name: _____

Primary 5-a-day

Platinum



7th October

$$76 \times 2.3$$

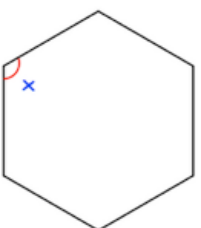
<input type="text"/>

$$15\% \times 680$$

<input type="text"/>

Here is a regular hexagon

Find the size of each angle

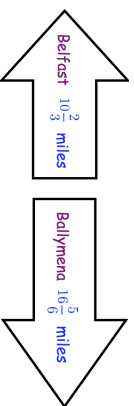


Chloe is building a fence for her garden.

The fence costs £9.25 per metre to build.
The fence is 16 metres long.



Work out the total cost of building the fence



Work out the distance from Belfast to Ballymena.

Name: _____

Primary 5-a-day

Platinum



7th October

$$76 \times 2.3$$

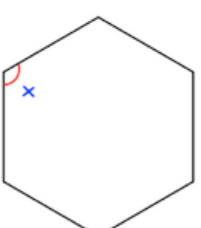
<input type="text"/>

$$15\% \times 680$$

<input type="text"/>

Here is a regular hexagon

Find the size of each angle

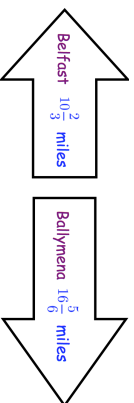


Chloe is building a fence for her garden.

The fence costs £9.25 per metre to build.
The fence is 16 metres long.



Work out the total cost of building the fence



Work out the distance from Belfast to Ballymena.