

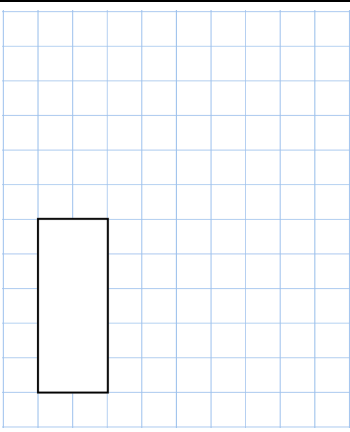
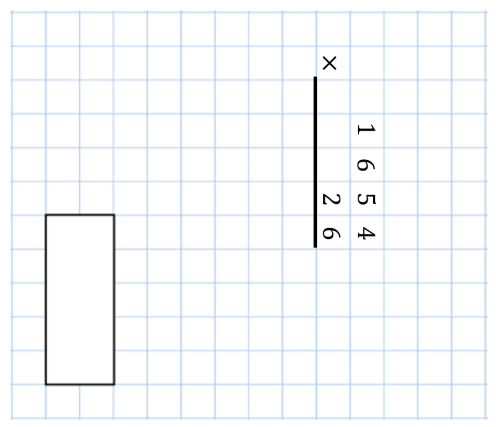

Name: _____

Primary 5-a-day

Platinum

9th October



<p>93</p>  <input type="text"/>	<p>1625 65</p> <p>×</p> <p>1654 26</p>  <input type="text"/>
<p>There are 1625 sweets in a tub. A group of friends share the sweets. Each person gets 65 sweets. How many friends are there?</p> 	
<p>Write $\frac{1}{8}$ as a decimal</p>	
<p>For every three 50p coins, Cain has two 20p coins. Cain has £40 in 20p coins. How much money does Cain have altogether?</p>	

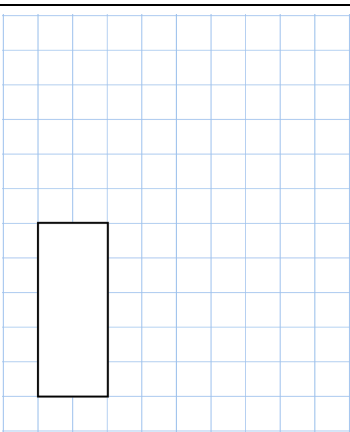
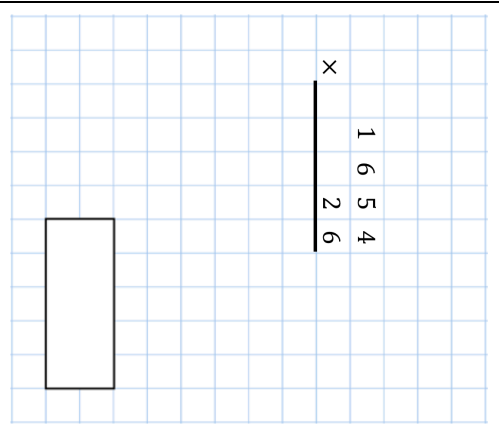

Name: _____

Primary 5-a-day

Platinum

9th October



<p>93</p>  <input type="text"/>	<p>1625 65</p> <p>×</p> <p>1654 26</p>  <input type="text"/>
<p>There are 1625 sweets in a tub. A group of friends share the sweets. Each person gets 65 sweets. How many friends are there?</p> 	
<p>Write $\frac{1}{8}$ as a decimal</p>	
<p>For every three 50p coins, Cain has two 20p coins. Cain has £40 in 20p coins. How much money does Cain have altogether?</p>	