

Name: _____

Primary 5-a-day

Platinum



17th September

20% of 5,500

<input type="text"/>

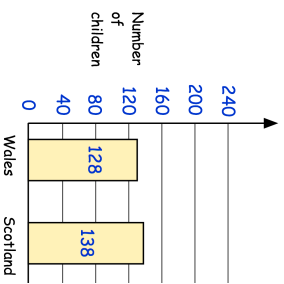
$1258 \div 34$

<input type="text"/>

The children in year 6 were asked if they had visited Wales, Scotland or both.

How many children visited **both** Wales and Scotland?

The bar chart shows the results.



Altogether there are 179 children in Year 6

Find the missing number



Was £50

Reduced by %

Now £35

Name: _____

Primary 5-a-day

Platinum



17th September

20% of 5,500

<input type="text"/>

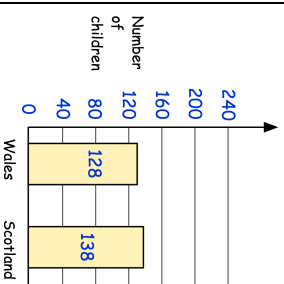
$1258 \div 34$

<input type="text"/>

The children in year 6 were asked if they had visited Wales, Scotland or both.

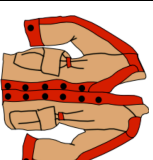
How many children visited **both** Wales and Scotland?

The bar chart shows the results.



Altogether there are 179 children in Year 6

Find the missing number



Was £50

Reduced by %

Now £35