

Name: _____

Primary 5-a-day


Silver

21st April



5 | 2 4 0

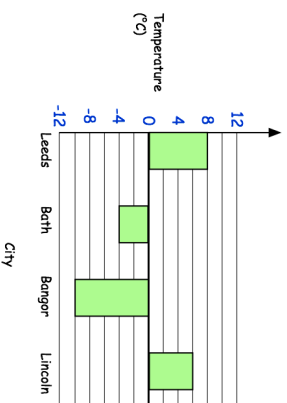
- 350 = 1,868



Draw a parallelogram

This graph shows the temperature in four cities on one day in December

What is the temperature in Lincoln?



How much warmer is the temperature in Lincoln than Bath?

Name: _____

Primary 5-a-day

Silver

21st April



5 | 2 4 0

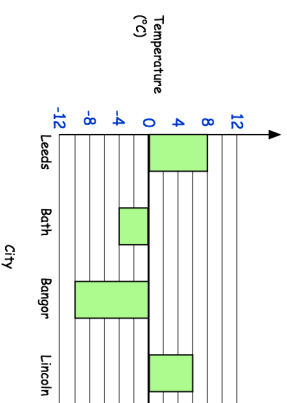
- 350 = 1,868



Draw a parallelogram

This graph shows the temperature in four cities on one day in December

What is the temperature in Lincoln?



How much warmer is the temperature in Lincoln than Bath?