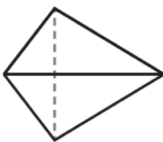




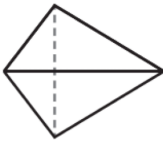


3rd April



<p>4 <math>\overline{)868}</math></p> <p><input type="text"/></p>	<p>708 – 59</p> <p><input type="text"/></p>
<p>Here is a triangular-based pyramid</p> <p>How many faces does it have?</p>	<p></p> <p><input type="text"/></p>
<p>Miles and Megan both buy 6 cans of fizzy drinks.</p> <p><b>Miles</b> 6 cans at 79p each</p> <p></p> <p><b>Megan</b> Pack of 6 cans for £4.49</p> <p></p>	<p>How much more money does Miles pay than Megan?</p>
<p>Olivia has a bag of grapes.</p> <p>She gives half of them to Harry.</p> <p>Harry eats four and then has five left.</p> <p>How many grapes did Olivia have at the start?</p>	<p><input type="text"/></p>

3rd April



<p>4 <math>\overline{)868}</math></p> <p><input type="text"/></p>	<p>708 – 59</p> <p><input type="text"/></p>
<p>Here is a triangular-based pyramid</p> <p>How many faces does it have?</p>	<p></p> <p><input type="text"/></p>
<p>Miles and Megan both buy 6 cans of fizzy drinks.</p> <p><b>Miles</b> 6 cans at 79p each</p> <p></p> <p><b>Megan</b> Pack of 6 cans for £4.49</p> <p></p>	<p>How much more money does Miles pay than Megan?</p>
<p>Olivia has a bag of grapes.</p> <p>She gives half of them to Harry.</p> <p>Harry eats four and then has five left.</p> <p>How many grapes did Olivia have at the start?</p>	<p><input type="text"/></p>