

Name: _____

Primary 5-a-day

Silver

16th August



$$13 \times 100$$

$$\square \div 4 = 15 \times 6$$

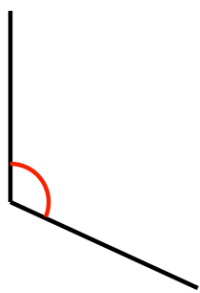
Grid area for calculation

Grid area for calculation

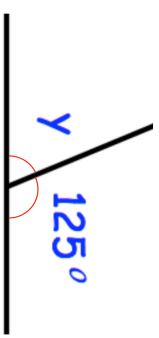
Complete the table

Fraction	Decimal	Percentage
$\frac{1}{2}$	0.5	
	0.75	75%

What type of angle is shown?



Find the size of angle y



Name: _____

Primary 5-a-day

Silver

16th August



$$13 \times 100$$

$$\square \div 4 = 15 \times 6$$

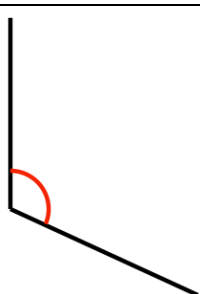
Grid area for calculation

Grid area for calculation

Complete the table

Fraction	Decimal	Percentage
$\frac{1}{2}$	0.5	
	0.75	75%

What type of angle is shown?



Find the size of angle y

