

21st August



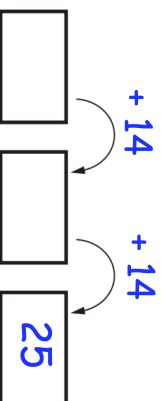
6 – 10

Grid area for the first problem, containing a large empty rectangular box.

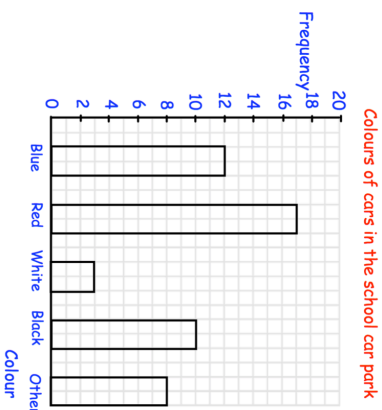
Find the missing numbers

Grid area for the second problem, containing a large empty rectangular box.

$$\begin{array}{r} 7 \\ \hline 2 \ 2 \ 4 \end{array}$$



How many red cars are in the school car park?



Jack says there are 10 yellow cars in the school car park. Is he correct?

21st August



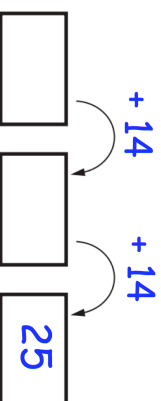
6 – 10

Grid area for the first problem, containing a large empty rectangular box.

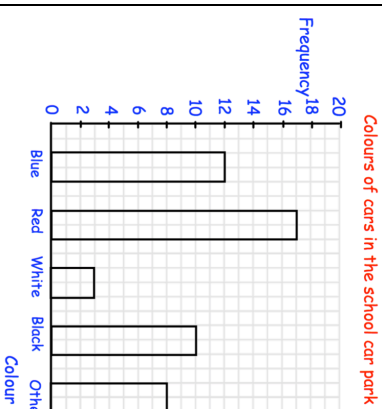
Find the missing numbers

Grid area for the second problem, containing a large empty rectangular box.

$$\begin{array}{r} 7 \\ \hline 2 \ 2 \ 4 \end{array}$$



How many red cars are in the school car park?



Jack says there are 10 yellow cars in the school car park. Is he correct?