

Name: _____

Primary 5-a-day

Silver

27th August

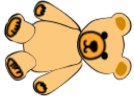


$$0.9 + 0.9 + 0.9$$

$$82 \times 6$$

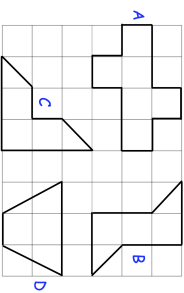
An assembly hall has 20 rows.
Each row has 12 chairs.
During an assembly there are 35 seats empty.
Work out how many people went to the assembly

£4.75 each



Find the cost of 5 teddy bears

Which two shapes **do not** have a line of symmetry?



Name: _____

Primary 5-a-day

Silver

27th August




$$0.9 + 0.9 + 0.9$$

$$82 \times 6$$

An assembly hall has 20 rows.
Each row has 12 chairs.
During an assembly there are 35 seats empty.
Work out how many people went to the assembly

£4.75 each



Find the cost of 5 teddy bears

Which two shapes **do not** have a line of symmetry?

