

Name: _____

Primary 5-a-day

Silver

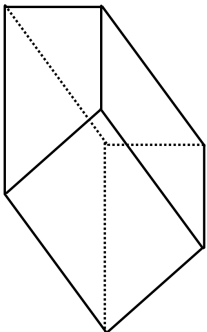
1st December



$5 - 9$

<input type="text"/>


How many vertices does this 3-D shape have?



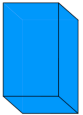
<input type="text"/>

Thomas buys 6 large boxes of sweets and 2 small boxes of sweets.

Large



Small



60 sweets

Write the three missing digits to make this addition correct

Altogether he bought 410 sweets.

How many sweets are in one small box?

3	7	1	0	
+	8	1		7
<hr/>				
	5	3	0	5

Name: _____

Primary 5-a-day

Silver

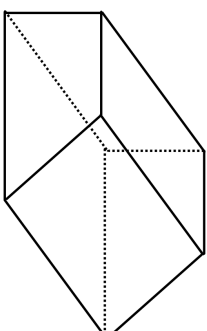
1st December



$5 - 9$

<input type="text"/>


How many vertices does this 3-D shape have?




<input type="text"/>

Thomas buys 6 large boxes of sweets and 2 small boxes of sweets.

Large



Small



60 sweets

Write the three missing digits to make this addition correct

Altogether he bought 410 sweets.

How many sweets are in one small box?

3	7	1	0	
+	8	1		7
<hr/>				
	5	3	0	5