

Name: \_\_\_\_\_

Primary 5-a-day

Silver

14th December



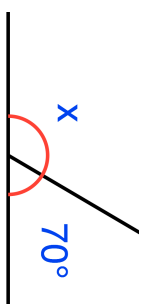
$14.7 - 1.9$

$5 - 9$

<div style="background-color: #e0e0e0; width: 100%; height: 100%;"></div>
---

<div style="background-color: #e0e0e0; width: 100%; height: 100%;"></div>
---

Find the size of angle x



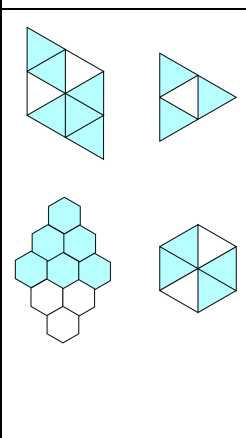
At a wedding there are 24 tables.

19 tables seat 6 guests.

The rest of the tables seat 9 guests.

Work out the total number of chairs needed.

Tick two shapes that are  $\frac{2}{3}$  shaded



Name: \_\_\_\_\_

Primary 5-a-day

Silver

14th December



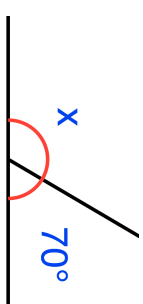
$14.7 - 1.9$

$5 - 9$

<div style="background-color: #e0e0e0; width: 100%; height: 100%;"></div>
---

<div style="background-color: #e0e0e0; width: 100%; height: 100%;"></div>
---

Find the size of angle x



At a wedding there are 24 tables.

19 tables seat 6 guests.

The rest of the tables seat 9 guests.

Work out the total number of chairs needed.

Tick two shapes that are  $\frac{2}{3}$  shaded

