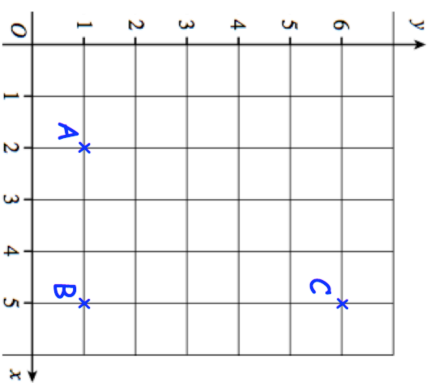


**25th December**

$717 - 150$

$6 \times 34$

Write down the coordinates of the point B

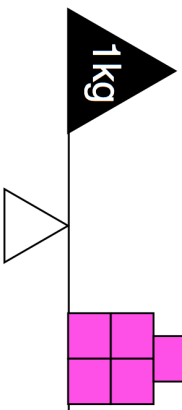


ABCD is a rectangle.

Plot the point D on the grid

5 identical pink blocks have a mass of 1kg

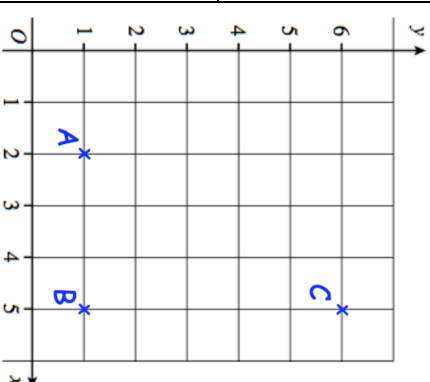
Find the mass one pink block

**25th December**

$717 - 150$

$6 \times 34$

Write down the coordinates of the point B



ABCD is a rectangle.

Plot the point D on the grid

5 identical pink blocks have a mass of 1kg

Find the mass one pink block

