

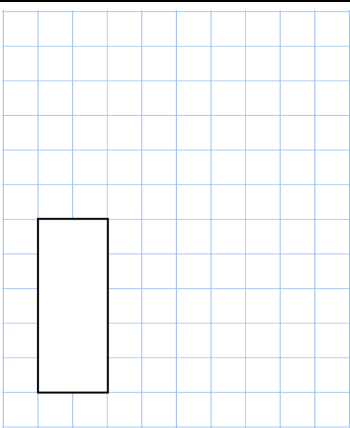
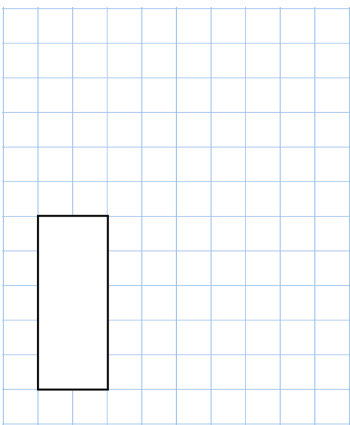



Name: _____

Primary 5-a-day

Silver

26th December



7×12 	$4\frac{1}{5} - \frac{1}{5}$ 
A bookshelf in a classroom is 116cm long. A teacher has 30 maths books, each 4cm wide. What is the maximum number of textbooks that will fit on the shelf?	
A square has a perimeter of 44cm Find the length of one side.	
Simon buys 3 drinks. He pays with a £5 note. This is his change. 	
Work out the cost of 1 drink.	

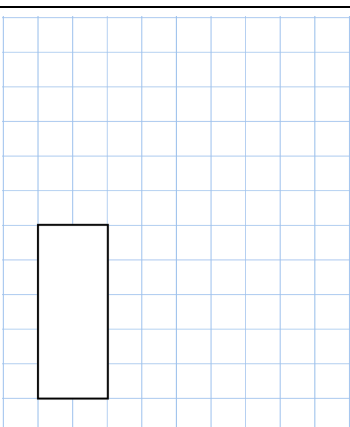
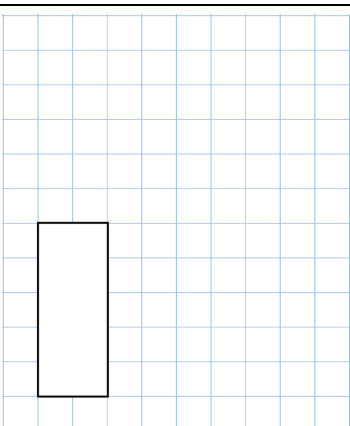



Name: _____

Primary 5-a-day

Silver

26th December



7×12 	$4\frac{1}{5} - \frac{1}{5}$ 
A bookshelf in a classroom is 116cm long. A teacher has 30 maths books, each 4cm wide. What is the maximum number of textbooks that will fit on the shelf?	
A square has a perimeter of 44cm Find the length of one side.	
Simon buys 3 drinks. He pays with a £5 note. This is his change. 	
Work out the cost of 1 drink.	