

Name: _____

Primary 5-a-day

Silver

28th December

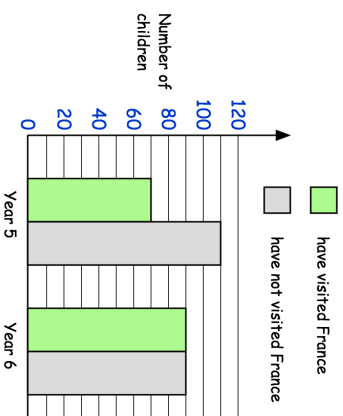


$7.5 - 6.6$

<div style="background-color: #e0e0e0; width: 100px; height: 30px; margin: 0 auto;"></div>
--

48×7

<div style="background-color: #e0e0e0; width: 100px; height: 30px; margin: 0 auto;"></div>
--




How many year 5 children have **not** visited France?

Billy says there are the same number of children in Year 5 and Year 6. Is he right?

A group of 9 friends go on a coach tour.

The total cost for the tour is £648

Work out the cost for 1 person?



Name: _____

Primary 5-a-day

Silver

28th December

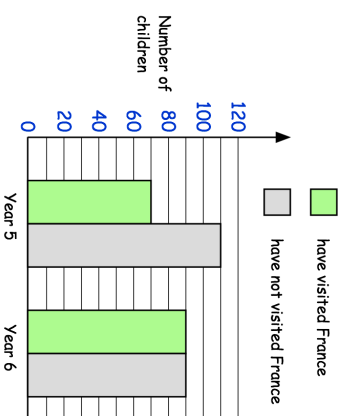


$7.5 - 6.6$

<div style="background-color: #e0e0e0; width: 100px; height: 30px; margin: 0 auto;"></div>
--

48×7

<div style="background-color: #e0e0e0; width: 100px; height: 30px; margin: 0 auto;"></div>
--



How many year 5 children have **not** visited France?

Billy says there are the same number of children in Year 5 and Year 6. Is he right?

A group of 9 friends go on a coach tour.

The total cost for the tour is £648

Work out the cost for 1 person?

