

Name: _____

Primary 5-a-day

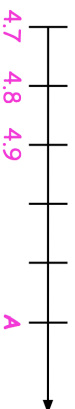
Silver

20th July

$12 \times 9 \times 3$

$\frac{2}{3}$ of 36

What number is marked at **A**?



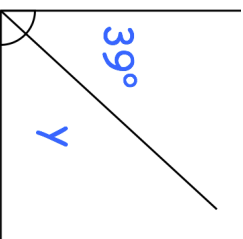
At a tournament there are 6 players in each team.

There are 114 players altogether.

How many teams is this?

A right angle is shown.

Find the size of angle y

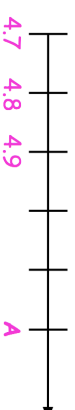


20th July

$12 \times 9 \times 3$

$\frac{2}{3}$ of 36

What number is marked at **A**?



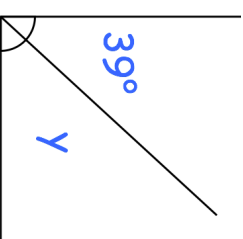
At a tournament there are 6 players in each team.

There are 114 players altogether.

How many teams is this?

A right angle is shown.

Find the size of angle y



Name: _____

Primary 5-a-day

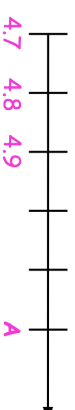
Silver

20th July

$12 \times 9 \times 3$

$\frac{2}{3}$ of 36

What number is marked at **A**?



At a tournament there are 6 players in each team.

There are 114 players altogether.

How many teams is this?

A right angle is shown.

Find the size of angle y

