

Name: \_\_\_\_\_

Primary 5-a-day

Silver

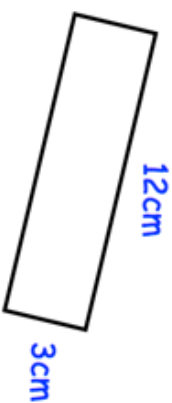
27th July



$$100 \times 10 \times 9$$

$$132 \div \square = 11$$

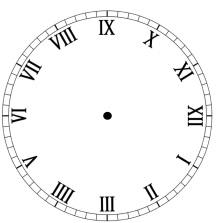
Work out the perimeter of the rectangle



Lee finished school at 14:45

He gets home 35 minutes later.

Show the time Lee gets home on the clock



In the circles, write a multiple that belongs to each set

numbers from 1 to 49 → multiple of 10 → **30**

numbers from 50 to 99 → multiple of 30 →

numbers from 100 to 149 → multiple of 15 →

Name: \_\_\_\_\_

Primary 5-a-day

Silver

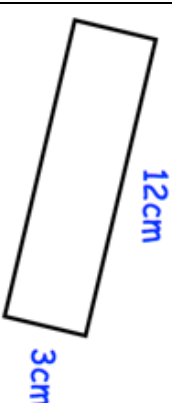
27th July



$$100 \times 10 \times 9$$

$$132 \div \square = 11$$

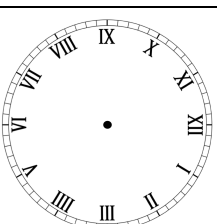
Work out the perimeter of the rectangle



Lee finished school at 14:45

He gets home 35 minutes later.

Show the time Lee gets home on the clock



In the circles, write a multiple that belongs to each set

numbers from 1 to 49 → multiple of 10 → **30**

numbers from 50 to 99 → multiple of 30 →

numbers from 100 to 149 → multiple of 15 →