

Name: _____

Primary 5-a-day

Silver



30th July

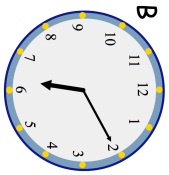
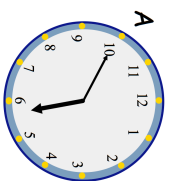
$$7,291 + 620$$

<div style="background-color: #e0e0e0; width: 100%; height: 100%;"></div>

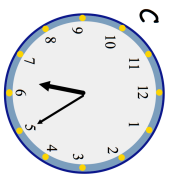
$$8 \times 48$$

<div style="background-color: #e0e0e0; width: 100%; height: 100%;"></div>

Which clock shows 18:10?



D



Which clock shows 17:50?

Beth runs 400m on Monday, Tuesday, Wednesday, Thursday and Friday.

How far has she run in total?

Give your answer in kilometres

Name: _____

Primary 5-a-day

Silver



30th July

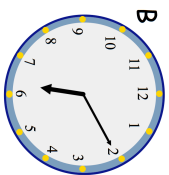
$$7,291 + 620$$

<div style="background-color: #e0e0e0; width: 100%; height: 100%;"></div>


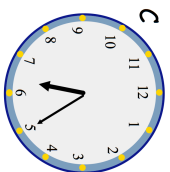
$$8 \times 48$$

<div style="background-color: #e0e0e0; width: 100%; height: 100%;"></div>

Which clock shows 18:10?



D



Which clock shows 17:50?

Beth runs 400m on Monday, Tuesday, Wednesday, Thursday and Friday.

How far has she run in total?

Give your answer in kilometres