

Name: _____

Primary 5-a-day

Silver

4th July



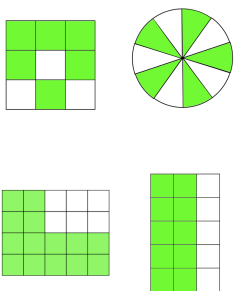
7 – 10

--

54 × 6

--

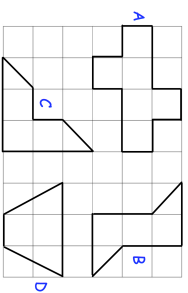
Tick the two shapes that are **not**
 $\frac{2}{3}$ shaded



In 2017 the 21st June was a Wednesday.

What day was the 4th July 2017?

Which two shapes have a line of symmetry?



Name: _____

Primary 5-a-day

Silver

4th July



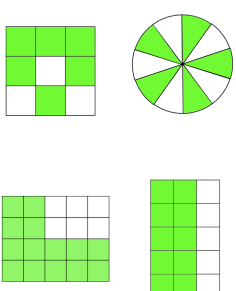
7 – 10

--

54 × 6

--

Tick the two shapes that are **not**
 $\frac{2}{3}$ shaded



In 2017 the 21st June was a Wednesday.

What day was the 4th July 2017?

Which two shapes have a line of symmetry?

