

Name: _____

Primary 5-a-day

Silver



15th June

$$725 - 190$$

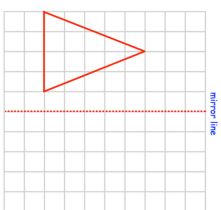
$$8 \times 43$$

There are 6,000 Lego bricks in a box.

Vicky and Conor take 900 bricks each. Mollie, Tim and Roger share the rest of the bricks equally.

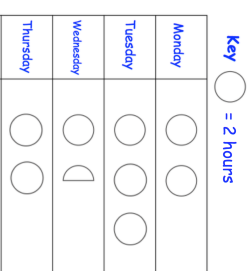
How many Lego bricks does Mollie get?

Reflect the triangle in the mirror line



This pictogram shows how much time Peter spent revising last week.

How much longer did Peter spend revising on Tuesday than Wednesday?



Name: _____

Primary 5-a-day

Silver



15th June

$$725 - 190$$

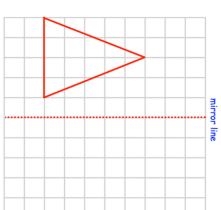
$$8 \times 43$$

There are 6,000 Lego bricks in a box.

Vicky and Conor take 900 bricks each. Mollie, Tim and Roger share the rest of the bricks equally.

How many Lego bricks does Mollie get?

Reflect the triangle in the mirror line



This pictogram shows how much time Peter spent revising last week.

How much longer did Peter spend revising on Tuesday than Wednesday?

