
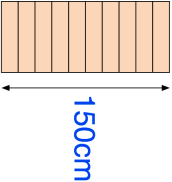


Name: \_\_\_\_\_

Primary 5-a-day

Silver




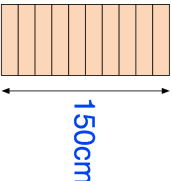
<b>17th June</b>	
$\begin{array}{r} 1585 \\ + 433 \\ \hline \end{array}$	$\frac{1}{7}$ of 35
<input type="text"/>	<input type="text"/>
Round 5,267 to the nearest 100	
A stack of 10 identical boxes is 150cm tall. Jake adds 3 more boxes. How tall is the stack now?	
Write down the value of the digit 3 in the answer to $23 \times 100$	

Name: \_\_\_\_\_

Primary 5-a-day

Silver



<b>17th June</b>	
$\begin{array}{r} 1585 \\ + 433 \\ \hline \end{array}$	$\frac{1}{7}$ of 35
<input type="text"/>	<input type="text"/>
Round 5,267 to the nearest 100	
A stack of 10 identical boxes is 150cm tall. Jake adds 3 more boxes. How tall is the stack now?	
Write down the value of the digit 3 in the answer to $23 \times 100$	