

Name: \_\_\_\_\_

Primary 5-a-day

Silver

1st May



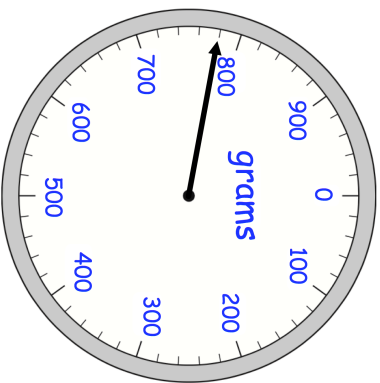
$$7 \times 12$$

<input type="text"/>
----------------------

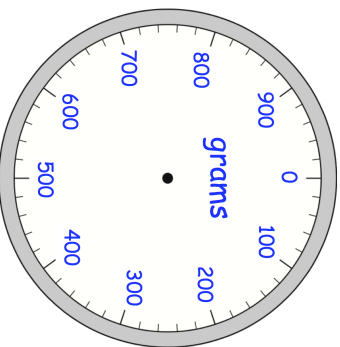
$$1,841 - 227$$

<input type="text"/>
----------------------

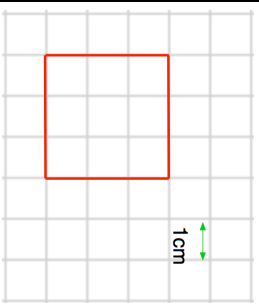
Steven places some oranges on a weighing scale.



He takes away one orange. The mass goes down by 130 grams.



Draw the pointer in its new position



Write down the area of the square

Name: \_\_\_\_\_

Primary 5-a-day

Silver

1st May



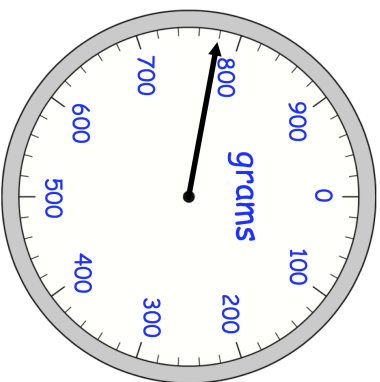
$$7 \times 12$$

<input type="text"/>
----------------------

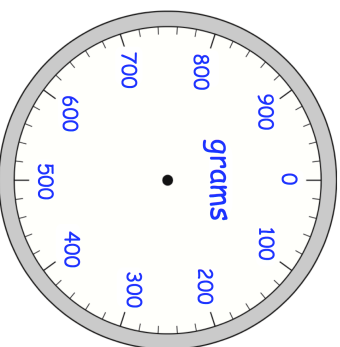
$$1,841 - 227$$

<input type="text"/>
----------------------

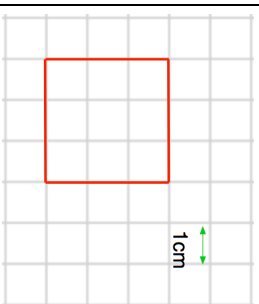
Steven places some oranges on a weighing scale.



He takes away one orange. The mass goes down by 130 grams.



Draw the pointer in its new position



Write down the area of the square