

Name: \_\_\_\_\_

Primary 5-a-day

Silver



15th May

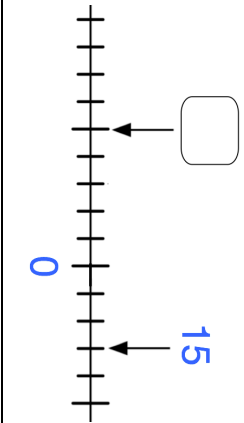
$\frac{1}{7}$  of 56

<input type="text"/>

$2,911 - 1,062$

<input type="text"/>


Write the missing number in the box



A number in Roman numerals is XXIX

Write XXIX in figures

Tick each angle that is **obtuse**



Name: \_\_\_\_\_

Primary 5-a-day

Silver



15th May

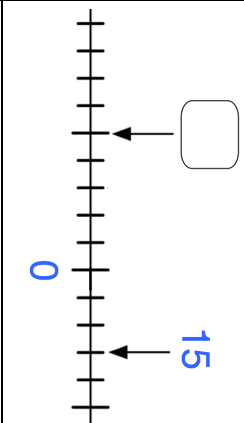
$\frac{1}{7}$  of 56

<input type="text"/>

$2,911 - 1,062$

<input type="text"/>

Write the missing number in the box



A number in Roman numerals is XXIX

Write XXIX in figures

Tick each angle that is **obtuse**

