

Name: _____

Primary 5-a-day

Silver

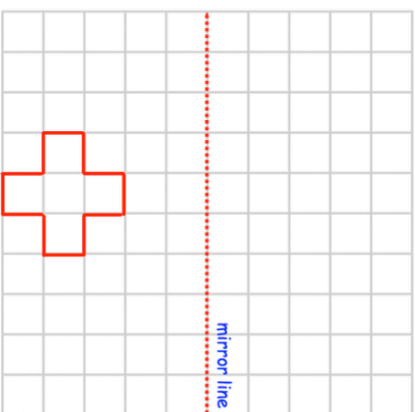


18th May

$$\begin{array}{r} 2851 \\ + 2683 \\ \hline \end{array}$$

$\frac{2}{3}$ of 18

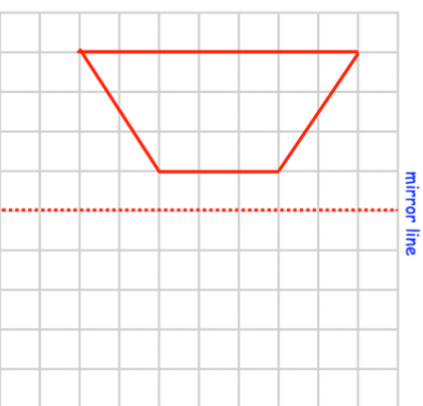
Reflect the shape in the mirror line



One book weighs the same as 150 drawing pins.

One hole-punch weighs the same as 600 drawing pins.

Reflect the shape in the mirror line



How many books weigh the same as one hole-punch?

Name: _____

Primary 5-a-day

Silver

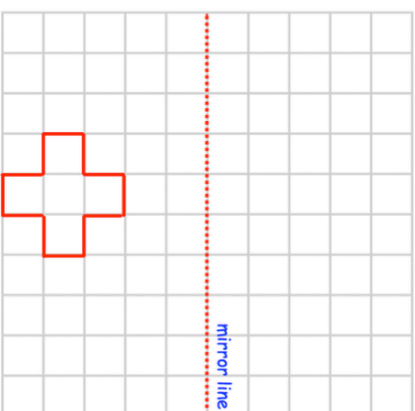


18th May

$$\begin{array}{r} 2851 \\ + 2683 \\ \hline \end{array}$$

$\frac{2}{3}$ of 18

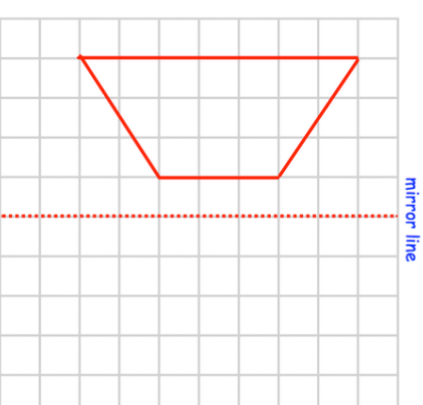
Reflect the shape in the mirror line



One book weighs the same as 150 drawing pins.

One hole-punch weighs the same as 600 drawing pins.

Reflect the shape in the mirror line



How many books weigh the same as one hole-punch?