

Name: _____

Primary 5-a-day

Silver



14th November

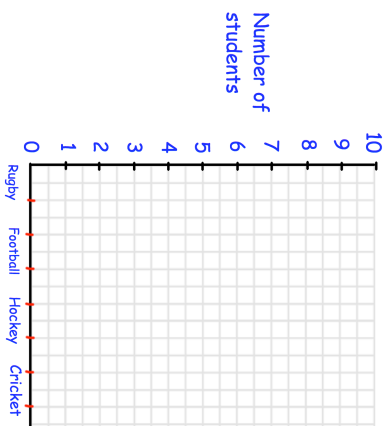
$$\frac{9}{10} - \frac{2}{10}$$

$$4,040 - 301$$

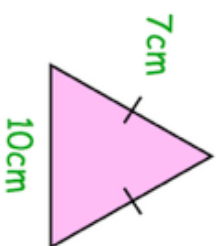
In a class of 20 students,

- 5 choose to play hockey
- Twice as many students play rugby than hockey.
- One more student plays cricket than football.

Show this on the bar chart



Work out the perimeter of this isosceles triangle.



Name: _____

Primary 5-a-day

Silver



14th November

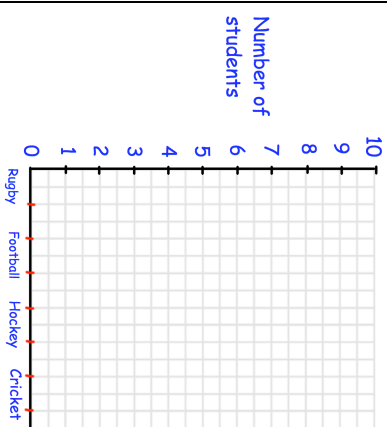
$$\frac{9}{10} - \frac{2}{10}$$

$$4,040 - 301$$

In a class of 20 students,

- 5 choose to play hockey
- Twice as many students play rugby than hockey.
- One more student plays cricket than football.

Show this on the bar chart



Work out the perimeter of this isosceles triangle.

