

Name: _____

Primary 5-a-day

Silver

10th October



$2 \times 3 \times 4 \times 5 \times 6 \times 7$

$2,000 \div 10$

Grid for calculation

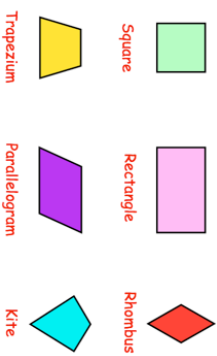
Grid for calculation

Arrange these temperatures in order, from lowest to highest.

0°C -20°C 6°C 17°C -13°C



Which shapes have perpendicular sides?



Using each number card once, make the largest even number

4 9 1 6

Four empty boxes for number arrangement

Name: _____

Primary 5-a-day

Silver

10th October



$2 \times 3 \times 4 \times 5 \times 6 \times 7$


$2,000 \div 10$

Grid for calculation

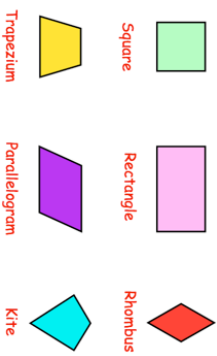
Grid for calculation

Arrange these temperatures in order, from lowest to highest.

0°C -20°C 6°C 17°C -13°C



Which shapes have perpendicular sides?



Using each number card once, make the largest even number

4 9 1 6

Four empty boxes for number arrangement