

Name: _____

Primary 5-a-day

Silver



2nd October

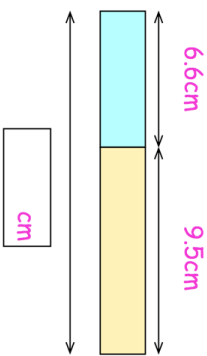
$$540 \div 6$$

--

$$8,000 - 80$$

--

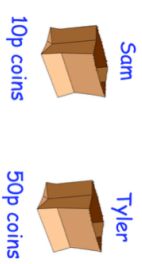
Work out the total length of the two blocks.



Sam has a bag of 10p coins.
Tyler has a bag of 50p coins.

Both bags have the same amount of money inside.

There are **forty** 10p coins in Sam's bag.



10p coins



50p coins

How many coins do they have altogether?

Name: _____

Primary 5-a-day

Silver



2nd October

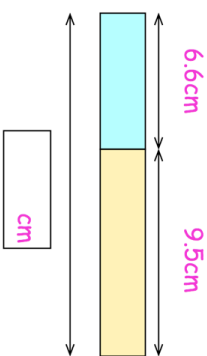
$$540 \div 6$$

--

$$8,000 - 80$$

--

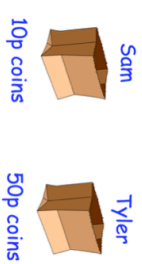
Work out the total length of the two blocks.



Sam has a bag of 10p coins.
Tyler has a bag of 50p coins.

Both bags have the same amount of money inside.

There are **forty** 10p coins in Sam's bag.



10p coins



50p coins

How many coins do they have altogether?