

Name: _____

Primary 5-a-day

Bronze




1st January


$$50 + 1000$$

$$18 \div 1$$

<div style="border: 1px solid black; height: 40px; width: 100%;"></div>

<div style="border: 1px solid black; height: 40px; width: 100%;"></div>

A  £3,000

C  £3,250

B  £2,199

D  £2,800

Put these cars in order of price, starting with the **lowest price**.

There are 110 people on a train.

At the next station, 60 people **get off the train** and 25 people **get on the train**.

How many people are on the train **now**?

What number is the arrow pointing to?



Name: _____

Primary 5-a-day

Bronze



1st January

$$50 + 1000$$


$$18 \div 1$$

<div style="border: 1px solid black; height: 40px; width: 100%;"></div>

<div style="border: 1px solid black; height: 40px; width: 100%;"></div>

A  £3,000

C  £3,250

B  £2,199

D  £2,800

Put these cars in order of price, starting with the **lowest price**.

There are 110 people on a train.

At the next station, 60 people **get off the train** and 25 people **get on the train**.

How many people are on the train **now**?

What number is the arrow pointing to?

